

Grade 1 Unit 4 Module 1

Practice Pages in Spanish

for Math at Home

© 2020 The Math Learning Center | mathlearningcenter.org

The Math Learning Center grants permission to learners, families, and educators to reproduce these documents in appropriate quantities for educational use. While you may link to these resources, any other redistribution requires written permission.



Dobles y dobles más o menos uno página 1 de 2

- 1 Colorea las tiras de diez cuadros para que coincidan con cada problema de suma. Resuelve cada ecuación.

<p>ej</p> $\begin{array}{r} 7 \\ + 7 \\ \hline 14 \end{array}$	<p>a</p> $\begin{array}{r} 7 \\ + 8 \\ \hline \end{array}$	<p>b</p> $\begin{array}{r} 8 \\ + 8 \\ \hline \end{array}$	<p>c</p> $\begin{array}{r} 9 \\ + 8 \\ \hline \end{array}$
<p>d</p> $\begin{array}{r} 6 \\ + 6 \\ \hline \end{array}$	<p>e</p> $\begin{array}{r} 5 \\ + 6 \\ \hline \end{array}$	<p>f</p> $\begin{array}{r} 4 \\ + 4 \\ \hline \end{array}$	<p>g</p> $\begin{array}{r} 4 \\ + 5 \\ \hline \end{array}$

(continúa en la página siguiente)

Dobles y dobles más o menos uno página 2 de 2**2** Dobles: Resuelve cada problema.

$3 + 3 = \underline{\quad}$

$5 + 5 = \underline{\quad}$

$2 + 2 = \underline{\quad}$

$4 + 4 = \underline{\quad}$

$1 + 1 = \underline{\quad}$

$0 + 0 = \underline{\quad}$

$6 + 6 = \underline{\quad}$

$9 + 9 = \underline{\quad}$

$8 + 8 = \underline{\quad}$

$7 + 7 = \underline{\quad}$

$10 + 10 = \underline{\quad}$

$4 + 4 = \underline{\quad}$

3 Dobles más o menos uno: Resuelve cada problema.

$3 + 4 = \underline{\quad}$

$5 + 6 = \underline{\quad}$

$2 + 3 = \underline{\quad}$

$4 + 5 = \underline{\quad}$

$1 + 2 = \underline{\quad}$

$0 + 1 = \underline{\quad}$

$6 + 7 = \underline{\quad}$

$7 + 8 = \underline{\quad}$

$8 + 9 = \underline{\quad}$

4 **RETO** Resuelve cada problema.

$25 + 25 = \underline{\quad}$

$25 + 26 = \underline{\quad}$

$26 + 26 = \underline{\quad}$

$26 + 27 = \underline{\quad}$

$27 + 27 = \underline{\quad}$

$27 + 28 = \underline{\quad}$

$$\begin{array}{r} 40 \\ + 40 \\ \hline \end{array}$$

$$\begin{array}{r} 20 \\ + 20 \\ \hline \end{array}$$

$$\begin{array}{r} 50 \\ + 50 \\ \hline \end{array}$$

$$\begin{array}{r} 30 \\ + 30 \\ \hline \end{array}$$

$$\begin{array}{r} 60 \\ + 60 \\ \hline \end{array}$$

$$\begin{array}{r} 70 \\ + 70 \\ \hline \end{array}$$

$$\begin{array}{r} 100 \\ + 100 \\ \hline \end{array}$$

$$\begin{array}{r} 30 \\ + 20 \\ \hline \end{array}$$

$$\begin{array}{r} 20 \\ + 30 \\ \hline \end{array}$$

$$\begin{array}{r} 40 \\ + 50 \\ \hline \end{array}$$

$$\begin{array}{r} 50 \\ + 60 \\ \hline \end{array}$$

$$\begin{array}{r} 60 \\ + 70 \\ \hline \end{array}$$

$$\begin{array}{r} 200 \\ + 300 \\ \hline \end{array}$$

$$\begin{array}{r} 400 \\ + 500 \\ \hline \end{array}$$



Práctica sobre la recta página 1 de 2

1 Resuelve cada problema. Muestra tu trabajo en las rectas numéricas.

a $5 + 3 =$ _____	
b $6 + 4 =$ _____	
c $7 + 2 =$ _____	
d $5 + 5 =$ _____	

2 Escribe una ecuación que coincida con cada recta numérica.

a	
b	





3 Suma.

$\begin{array}{r} 2 \\ + 2 \\ \hline \end{array}$	$\begin{array}{r} 4 \\ + 2 \\ \hline \end{array}$	$\begin{array}{r} 5 \\ + 2 \\ \hline \end{array}$	$\begin{array}{r} 3 \\ + 5 \\ \hline \end{array}$	$\begin{array}{r} 6 \\ + 3 \\ \hline \end{array}$	$\begin{array}{r} 7 \\ + 3 \\ \hline \end{array}$	$\begin{array}{r} 9 \\ + 0 \\ \hline \end{array}$
---------------------------------------------------	---------------------------------------------------	---------------------------------------------------	---------------------------------------------------	---------------------------------------------------	---------------------------------------------------	---------------------------------------------------

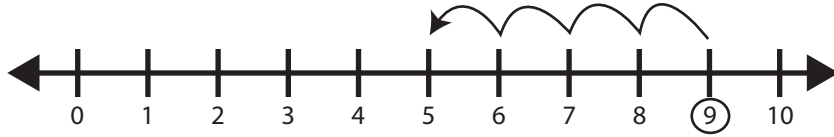
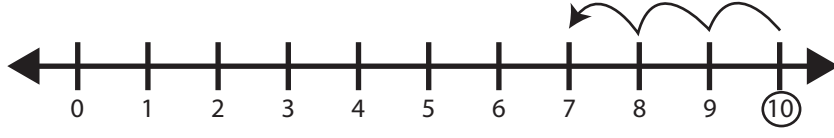
(continúa en la página siguiente)

Práctica sobre la recta página 2 de 2

4 Resuelve cada problema. Muestra tu trabajo en las rectas numéricas.

a $7 - 3 = \underline{\quad}$	
b $9 - 5 = \underline{\quad}$	
c $6 - 4 = \underline{\quad}$	
d $8 - 3 = \underline{\quad}$	

5 Escribe una ecuación que coincida con cada recta numérica.

a	
b	

6 Resta.

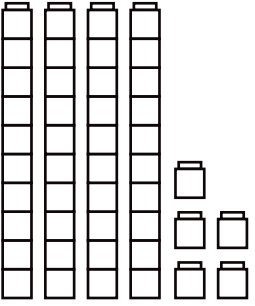
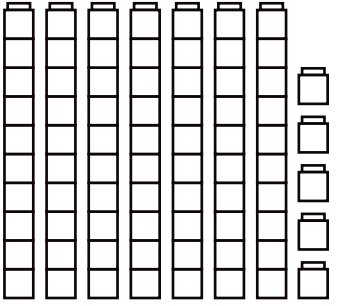
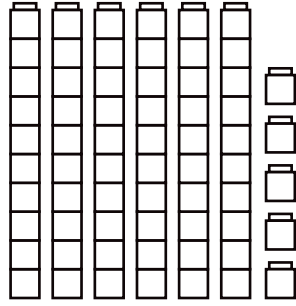
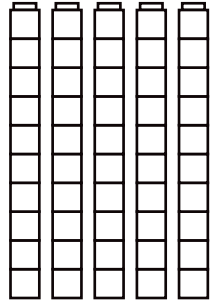
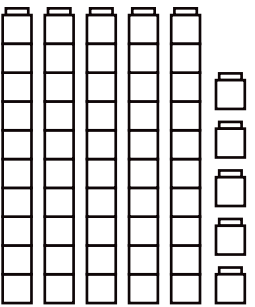
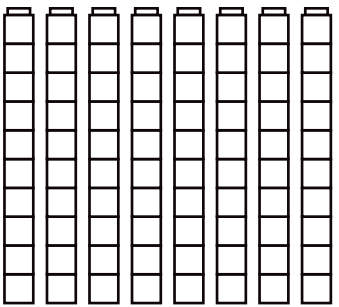


$\begin{array}{r} 6 \\ -2 \\ \hline \end{array}$	$\begin{array}{r} 4 \\ -1 \\ \hline \end{array}$	$\begin{array}{r} 5 \\ -3 \\ \hline \end{array}$	$\begin{array}{r} 3 \\ -2 \\ \hline \end{array}$	$\begin{array}{r} 7 \\ -5 \\ \hline \end{array}$	$\begin{array}{r} 8 \\ -4 \\ \hline \end{array}$	$\begin{array}{r} 2 \\ -2 \\ \hline \end{array}$
--------------------------------------------------	--------------------------------------------------	--------------------------------------------------	--------------------------------------------------	--------------------------------------------------	--------------------------------------------------	--------------------------------------------------

NOMBRE _____

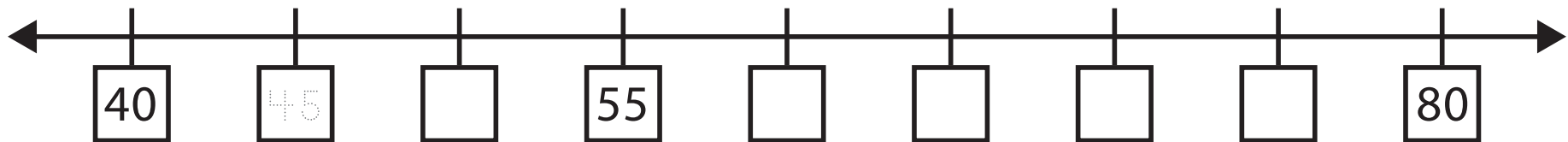
FECHA _____

 **Cubos en la recta**

1 Cuenta los cubos en cada grupo de abajo. Escribe el número en la línea.

<p>a</p> <p>_____</p> 	<p>b</p> <p>_____</p> 	<p>c</p> <p>_____</p> 	<p>d</p> <p>_____</p> 
<p>e</p> <p>_____</p> 	<p>f</p> <p>_____</p> 	<p>g</p> <p>_____</p> 	<p>h</p> <p>_____</p> 

2 Completa los números faltantes en la recta numérica. Usa los números anteriores como ayuda.



Answer Keys

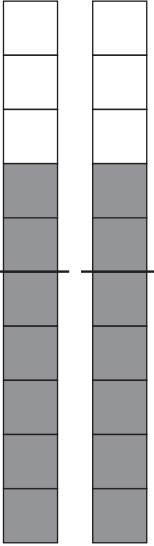
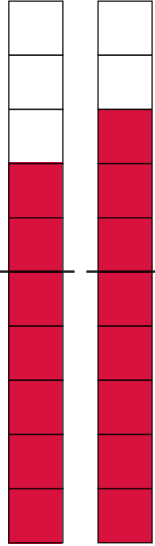
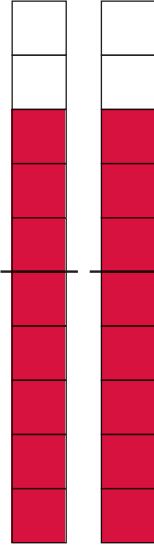

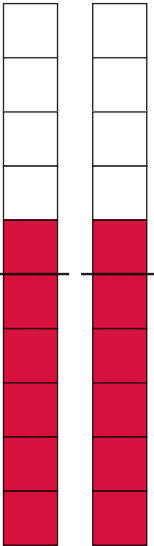
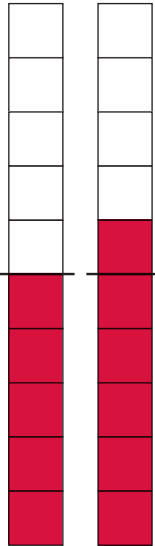
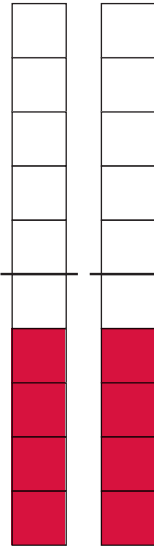
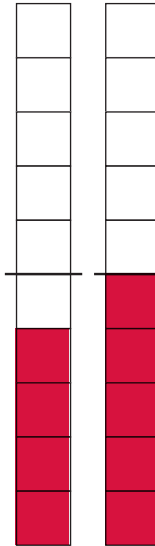
NAME _____

DATE _____



Doubles & Doubles Plus or Minus One page 1 of 2

1 Color the ten-strips to match each addition problem. Solve each equation.

<p>ex</p>  $\begin{array}{r} 7 \\ + 7 \\ \hline 14 \end{array}$	<p>a</p>  $\begin{array}{r} 7 \\ + 8 \\ \hline 15 \end{array}$	<p>b</p>  $\begin{array}{r} 8 \\ + 8 \\ \hline 16 \end{array}$	<p>c</p>  $\begin{array}{r} 9 \\ + 8 \\ \hline 17 \end{array}$
<p>d</p>  $\begin{array}{r} 6 \\ + 6 \\ \hline 12 \end{array}$	<p>e</p>  $\begin{array}{r} 5 \\ + 6 \\ \hline 11 \end{array}$	<p>f</p>  $\begin{array}{r} 4 \\ + 4 \\ \hline 8 \end{array}$	<p>g</p>  $\begin{array}{r} 4 \\ + 5 \\ \hline 9 \end{array}$

Students might color the ten-strips in the opposite order
(e.g., for item a they might put 8 on the left and 7 on the right).
If their mathematics are accurate, this is fine.

(continued on next page)

NAME _____

DATE _____

Doubles & Doubles Plus or Minus One page 2 of 2**2** Doubles: Solve each problem.

$3 + 3 = \underline{6}$

$5 + 5 = \underline{10}$

$2 + 2 = \underline{4}$

$4 + 4 = \underline{8}$

$1 + 1 = \underline{2}$

$0 + 0 = \underline{0}$

$6 + 6 = \underline{12}$

$9 + 9 = \underline{18}$

$8 + 8 = \underline{16}$

$7 + 7 = \underline{14}$

$10 + 10 = \underline{20}$

$4 + 4 = \underline{8}$

3 Doubles Plus or Minus One: Solve each problem.

$3 + 4 = \underline{7}$

$5 + 6 = \underline{11}$

$2 + 3 = \underline{5}$

$4 + 5 = \underline{9}$

$1 + 2 = \underline{3}$

$0 + 1 = \underline{1}$

$6 + 7 = \underline{13}$

$7 + 8 = \underline{15}$

$8 + 9 = \underline{17}$

4 CHALLENGE Solve each problem.

$25 + 25 = \underline{50}$

$25 + 26 = \underline{51}$

$26 + 26 = \underline{52}$

$26 + 27 = \underline{53}$

$27 + 27 = \underline{54}$

$27 + 28 = \underline{55}$

$\begin{array}{r} 40 \\ + 40 \\ \hline 80 \end{array}$	$\begin{array}{r} 20 \\ + 20 \\ \hline 40 \end{array}$	$\begin{array}{r} 50 \\ + 50 \\ \hline 100 \end{array}$	$\begin{array}{r} 30 \\ + 30 \\ \hline 60 \end{array}$	$\begin{array}{r} 60 \\ + 60 \\ \hline 120 \end{array}$	$\begin{array}{r} 70 \\ + 70 \\ \hline 140 \end{array}$	$\begin{array}{r} 100 \\ + 100 \\ \hline 200 \end{array}$
--------------------------------------------------------	--------------------------------------------------------	---------------------------------------------------------	--------------------------------------------------------	---------------------------------------------------------	---------------------------------------------------------	-----------------------------------------------------------


$\begin{array}{r} 30 \\ + 20 \\ \hline 50 \end{array}$	$\begin{array}{r} 20 \\ + 30 \\ \hline 50 \end{array}$	$\begin{array}{r} 40 \\ + 50 \\ \hline 90 \end{array}$	$\begin{array}{r} 50 \\ + 60 \\ \hline 110 \end{array}$	$\begin{array}{r} 60 \\ + 70 \\ \hline 130 \end{array}$	$\begin{array}{r} 200 \\ + 300 \\ \hline 500 \end{array}$	$\begin{array}{r} 400 \\ + 500 \\ \hline 900 \end{array}$
--------------------------------------------------------	--------------------------------------------------------	--------------------------------------------------------	---------------------------------------------------------	---------------------------------------------------------	-----------------------------------------------------------	-----------------------------------------------------------


NAME _____


DATE _____


**Practice on the Line** page 1 of 2**1** Solve each problem. Show your work on the number lines.

Student work on the number lines will vary.

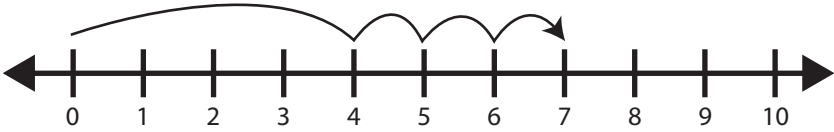
a $5 + 3 = \underline{8}$ 

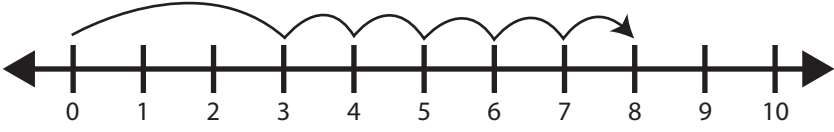
b $6 + 4 = \underline{10}$ 

c $7 + 2 = \underline{9}$ 

d $5 + 5 = \underline{10}$ 

2 Write an equation to match each number line.*Student work may vary. Likely equations are shown below.*

a  $4 + 3 = 7$

b  $3 + 5 = 8$

3 Add.

$$\begin{array}{r} 2 \\ +2 \\ \hline 4 \end{array}$$

$$\begin{array}{r} 4 \\ +2 \\ \hline 6 \end{array}$$

$$\begin{array}{r} 5 \\ +2 \\ \hline 7 \end{array}$$

$$\begin{array}{r} 3 \\ +5 \\ \hline 8 \end{array}$$

$$\begin{array}{r} 6 \\ +3 \\ \hline 9 \end{array}$$

$$\begin{array}{r} 7 \\ +3 \\ \hline 10 \end{array}$$

$$\begin{array}{r} 9 \\ +0 \\ \hline 9 \end{array}$$


(continued on next page)


NAME _____


DATE _____


Practice on the Line page 2 of 2**4** Solve each problem. Show your work on the number lines.

Student work on the number lines will vary.

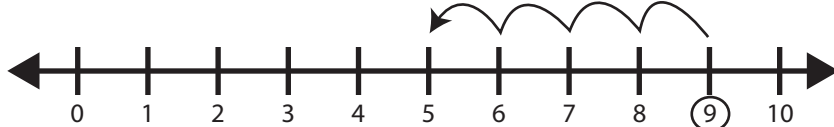
a $7 - 3 = \underline{4}$ 


b $9 - 5 = \underline{4}$ 

c $6 - 4 = \underline{2}$ 

d $8 - 3 = \underline{5}$ 

5 Write an equation to match each number line.*Student work may vary. Likely equations are shown below.*

a  $9 - 4 = 5$

b  $10 - 3 = 7$

6 Subtract.

$$\begin{array}{r} 6 \\ -2 \\ \hline 4 \end{array}$$

$$\begin{array}{r} 4 \\ -1 \\ \hline 3 \end{array}$$

$$\begin{array}{r} 5 \\ -3 \\ \hline 2 \end{array}$$

$$\begin{array}{r} 3 \\ -2 \\ \hline 1 \end{array}$$

$$\begin{array}{r} 7 \\ -5 \\ \hline 2 \end{array}$$

$$\begin{array}{r} 8 \\ -4 \\ \hline 4 \end{array}$$

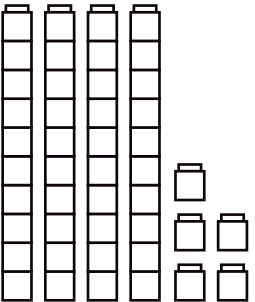
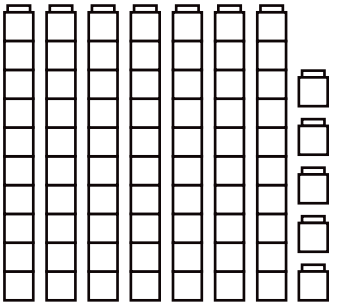
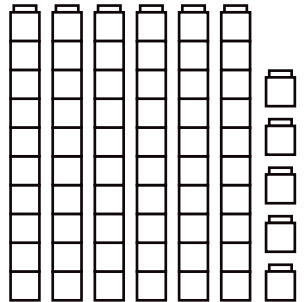
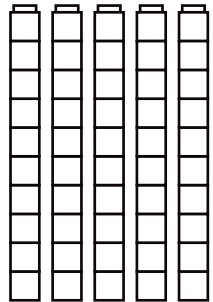
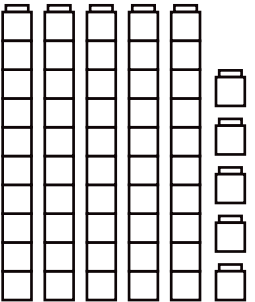
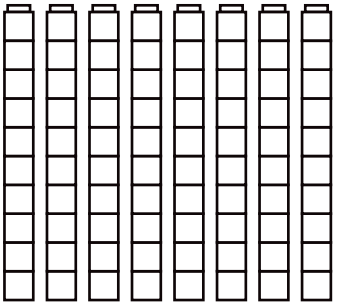


$$\begin{array}{r} 2 \\ -2 \\ \hline 0 \end{array}$$

NAME _____

DATE _____

Cubes on the Line

1 Count the cubes in each group below. Write the number on the line.

<p>a</p> <p><u>45</u></p> 	<p>b</p> <p><u>75</u></p> 	<p>c</p> <p><u>65</u></p> 	<p>d</p> <p><u>50</u></p> 
<p>e</p> <p><u>55</u></p> 	<p>f</p> <p><u>80</u></p> 	<p>g</p> <p><u>60</u></p> 	<p>h</p> <p><u>70</u></p> 

2 Fill in the missing numbers on the number line. Use the numbers above to help you.

